

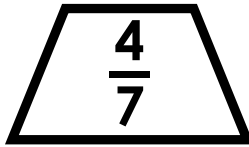


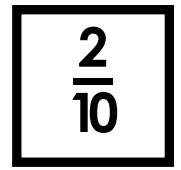

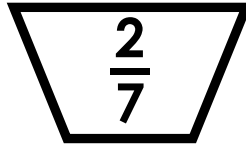





Name: _____

Shape Addition



Find the sum of the fractions in the circles.

Find the sum of the fractions in the squares.

Find the sum of the fractions in the triangles.

Find the sum of the fractions in the hexagons.

Find the sum of the fractions in the octagons.

Find the sum of the fractions in the trapezoids.