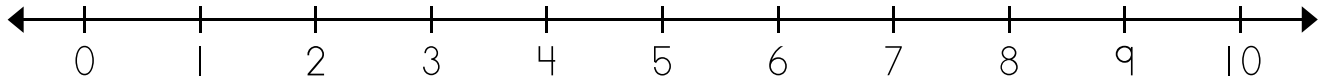


Name: \_\_\_\_\_

## Number Line Subtraction

a.



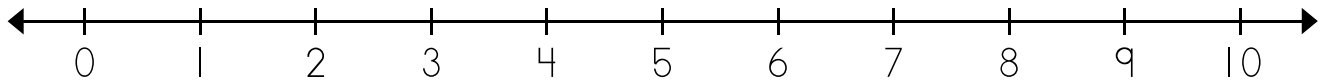
$$8 - \underline{\quad} = \underline{\quad}$$

I started at \_\_\_\_\_.

I counted back \_\_\_\_\_ spaces.

I stopped on \_\_\_\_\_.

b.



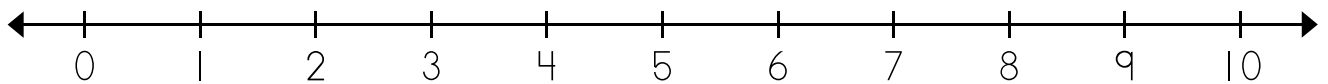
$$5 - \underline{\quad} = 3$$

I started at \_\_\_\_\_.

I counted back \_\_\_\_\_ spaces.

I stopped on \_\_\_\_\_.

c.



$$10 - \underline{\quad} = 6$$

I started at \_\_\_\_\_.

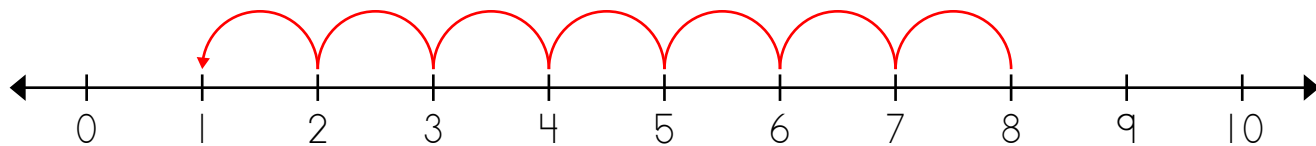
I counted back \_\_\_\_\_ spaces.

I stopped on \_\_\_\_\_.

# ANSWER KEY

## Number Line Subtraction

a.



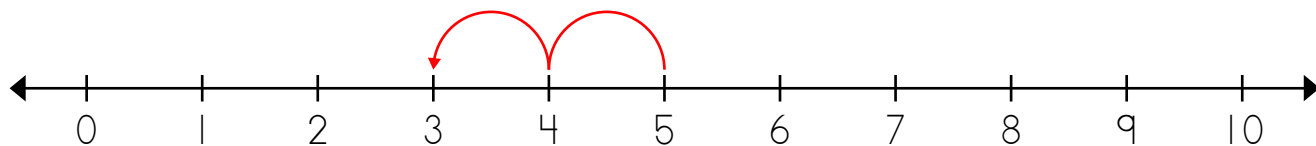
$$8 - \underline{7} = 1$$

I started at 8.

I counted back 7 spaces.

I stopped on 1.

b.



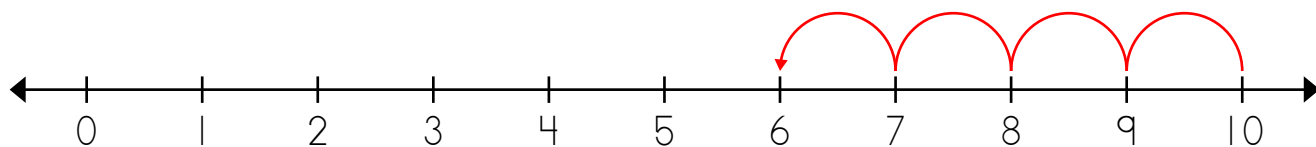
$$5 - \underline{2} = 3$$

I started at 5.

I counted back 2 spaces.

I stopped on 3.

c.



$$10 - \underline{4} = 6$$

I started at 10.

I counted back 4 spaces.

I stopped on 6.